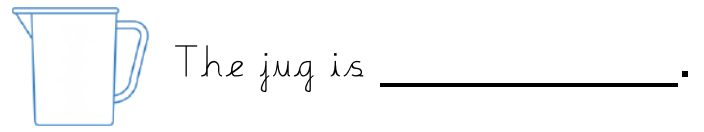
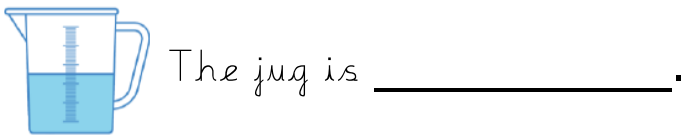

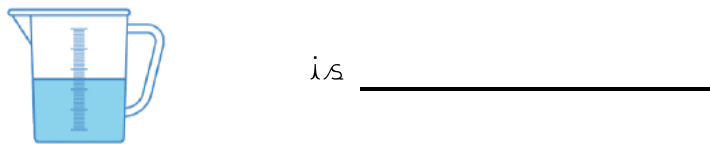
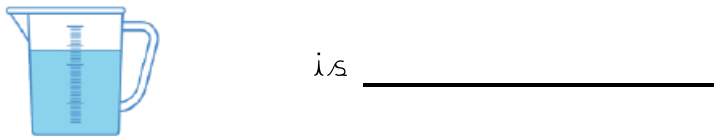


I can describe and compare capacity and volume - Challenges

empty	half full	nearly full	full
-------	-----------	-------------	------



greater than	equal to	less than
--------------	----------	-----------



Tick the correct statements.

A



B



The volume of jug A is greater than jug B.

The volume of jug B is greater than jug A.

The capacity of the jugs is the same.

What would you say about these statements? Always sometimes or never?

The tallest container holds the most liquid.

Identical containers can have a different capacity.

Rosie, Teddy and Amir are describing their glasses of water.



My glass has more water than Teddy's.

Rosie



My glass is nearly full.

Teddy



My glass has less water than Rosie's.

Amir

Can you fill in how much water could be in each of the children's glasses?



Rosie



Teddy



Amir