















Thursday 26<sup>th</sup> March 2020

I can find one more and one less than a number to 50.


		There are ..... teddies.
		One more is <input type="checkbox"/>
		One less is <input type="checkbox"/>

		There are ..... teddies.
		One more is <input type="checkbox"/>
		One less is <input type="checkbox"/>

		There are ..... teddies.
		One more is <input type="checkbox"/>
		One less is <input type="checkbox"/>

		
one less		one more
		
<input type="text"/>	34	<input type="text"/>
		One more is <input type="checkbox"/>
		One less is <input type="checkbox"/>


one less




one more

One more is

One less is



one less




one more

One more is

One less is



one less



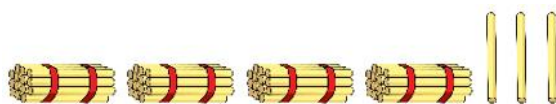
one more

One more is

One less is



one less



one more

One more is

One less is



Find one more and one less than the number circled.

6	7	8	9	10	11	12	13	14	15	16	17	18	19
---	---	---	---	----	----	----	----	----	----	----	----	----	----

One more is

One less is

43	44	45	46	47	48
----	----	----	----	----	----

One more is

One less is

1	2	3	4	5	6	7	8	9	10
11	12	13	14	15	16	17	18	19	20
21	22	23	24	25	26	27	28	29	30
31	32	33	34	35	36	37	38	39	40
41	42	43	44	45	46	47	48	49	50
51	52	53	54	55	56	57	58	59	60
61	62	63	64	65	66	67	68	69	70
71	72	73	74	75	76	77	78	79	80
81	82	83	84	85	86	87	88	89	90
91	92	93	94	95	96	97	98	99	100


One more is

One less is

1	2	3	4	5	6	7	8	9	10
11	12	13	14	15	16	17	18	19	20
21	22	23	24	25	26	27	28	29	30
31	32	33	34	35	36	37	38	39	40
41	42	43	44	45	46	47	48	49	50

One more is

One less is



What is one more?

A. 23

B. 22

C. 24



What is one less?

A. 15

B. 17

C. 16



What is one more?

A. 29

B. 40

C. 31

Choose the correct numbers to make the sentences correct.

28   26   33   45

36   43   35   49

is one less than 27

34 is one less than

is one more than 44

50 is one more than