

1

Here is a number written in Roman numerals.

CXV

Write the number in figures.

1 mark

2

Complete the table.

Number	Roman Numerals
LX	60
LXXVI	
XCIII	

2 marks

3

Here is a number written in Roman numerals.

XXIV

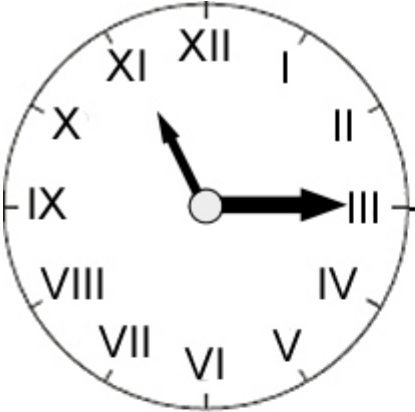
Write the number in figures.

1 mark

4

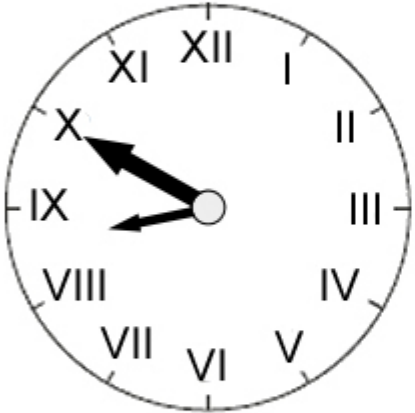
Here are three clock faces.

Match each clock face to the same time on a digital clock.



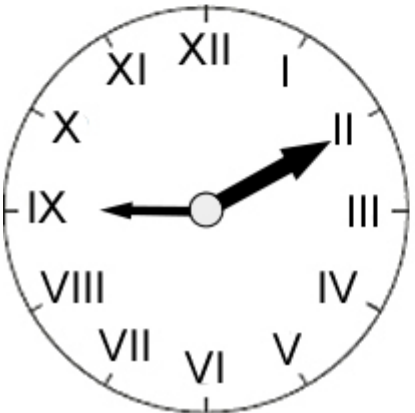
11:15

9:50



8:10

8:50



2:10

9:10

2 marks

5

Sanaa says,

'On my Roman Numeral clock face, the big hand is on the VI and the little hand is between the IX and the X'

What is the time on Sanaa's clock face?

1 mark

6

Write the answers to these calculations in Roman numerals.

One has been done for you.

$$V + VI = XI$$

$$IX + XLV =$$

$$XC - XXIV =$$

2 marks

7

At the end of a film, the year is given in Roman numerals.



Write the year MMVI in **figures**.

1 mark