


Monday 11th May: I can find half of an amount.



There are ____ fish.

--	--


$\frac{1}{2}$ of ____ is ____.



There are ____ apples.

--	--

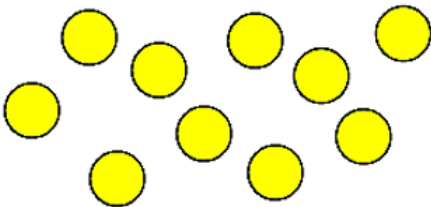
$\frac{1}{2}$ of ____ is ____.



There are ____ counters.

--	--

$\frac{1}{2}$ of ____ is ____.



There are ____ counters.

--	--

$\frac{1}{2}$ of ____ is ____.