



I can double numbers within 20.



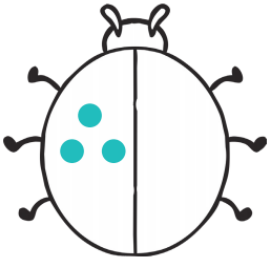
Double _____ is _____

_____ + _____ = _____




Double _____ is _____

_____ + _____ = _____



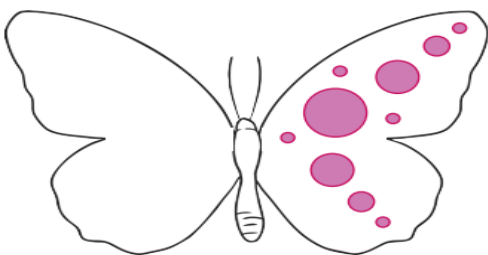
Double _____ is _____

_____ + _____ = _____




Double _____ is _____

_____ + _____ = _____



Double _____ is _____

_____ + _____ = _____



Double _____ is _____

_____ + _____ = _____

Challenges



Double 5 is 5.

$$5 + 5 = 5.$$

Is he right? Explain your answer.



Double 9 is 18.

$$9 + 9 = 18.$$

Is he right? Explain your answer.

Ali buys a jar of sweets. Each jar has 7 sweets inside. How many sweets will he have if he buys 2 jars?



Explain your answer.

Find the mistakes in these answers. Can you fix them?

Double 4 = 10



Double 3 = 6



Double 2 = 5



Double 5 = 10

