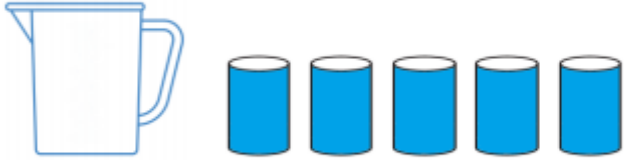


I can measure and compare the capacity of different containers.

The jug was full.



The full jug was emptied into some cups.

The capacity is _____ cups.

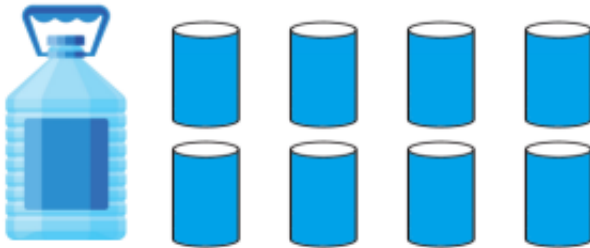
The teapot was full.



The full teapot was emptied into some cups.

The capacity is _____ cups.

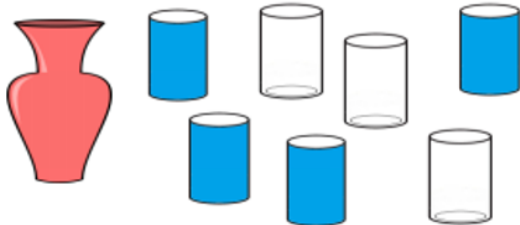
The bottle was full.



The full bottle was emptied into some cups.

The capacity is _____ cups.

The vase was full.



The capacity is **7** cups.

True or False?

Explain your answer.

3a. Jo and Tom are filling their cups with water from the jug. Who is correct? Convince me.



Jo's cup



Tom's cup



I will get more water.

Jo

We will both get the same.



Tom

R