


# Monday 27<sup>th</sup> April - Challenges


ROW



There are  fishes in a *row*.

There are  *rows*.


COLUMN



There are  fishes in a *column*.

There are  *columns*.


ROW



There are  cookies in a *row*.

There are  *rows*.

COLUMN



There are  cookies in a *column*.

There are  *columns*.

Which is the odd one out? Why?

$$2 + 2 + 2 = 6$$

There are 2 apples in each row. There are 4 rows.



Which is the odd one out? Why?



There are 5 columns.

$$2 + 2 + 2 + 2 + 2 = 10$$

There are 2 pears in each column