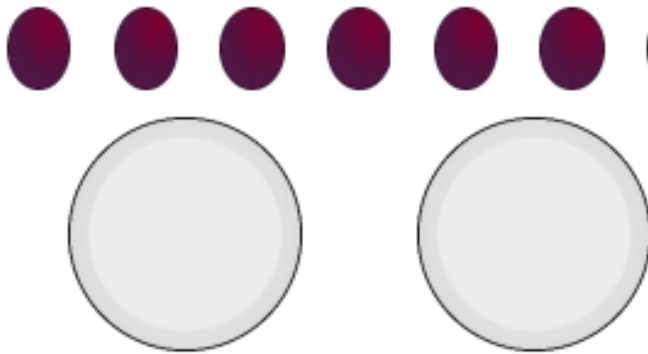


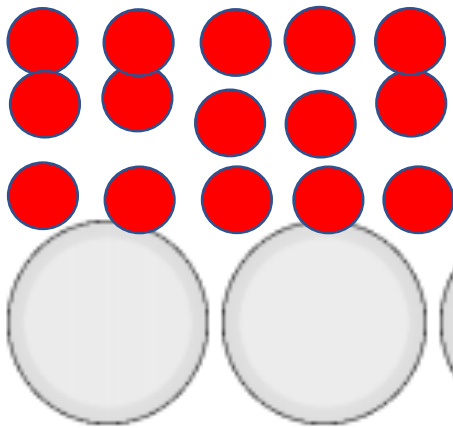
# Maths 4/5/20: Making equal groups by sharing - Challenges

Share the 6 eggs between the 2 plates. Remember to cross each egg out as you put it on a plate.



Each plate has .....eggs.

Share the 15 counters between the 5 plates.



Each plate has .....counters.

Use the box to show your working out.

**5a. Harry has shared 15 sweets between 5 plates.**



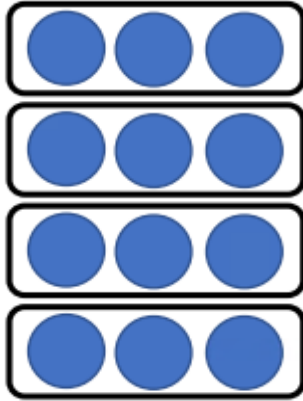
**Has he shared them equally?**

**5b. Amina has shared 16 apples between 2 plates.**




**Has she shared them equally?**

True or false? There are 3 equal groups of 5 counters.



True or false? There are 8 equal groups of 2 flowers.



Super Tricky Challenges:

What number is Yaya thinking of?



My number is between 8 and 12.

My number shares equally into 2 groups.

What number is Henry thinking of?



My number is between 5 and 25.

My number shares equally into 10 groups.

you share my number equally into 10 groups, you get an even number in each group.