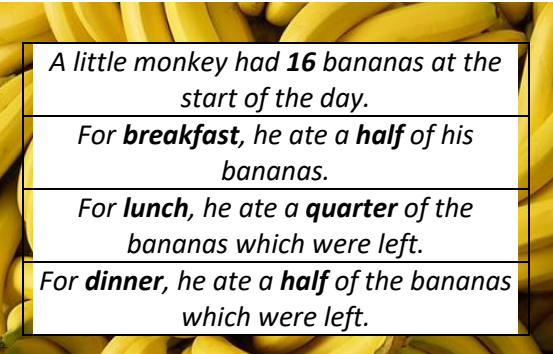
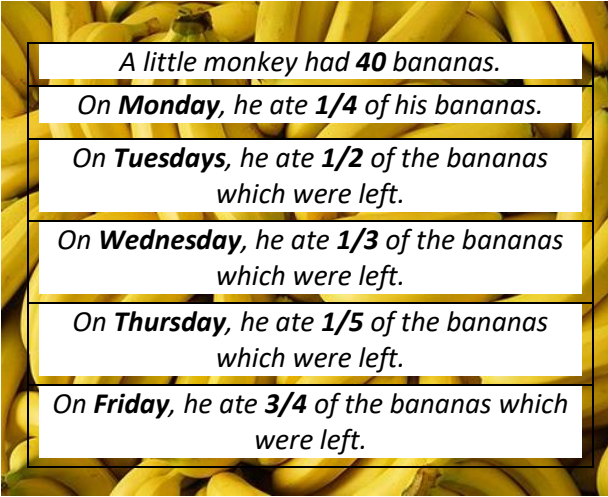
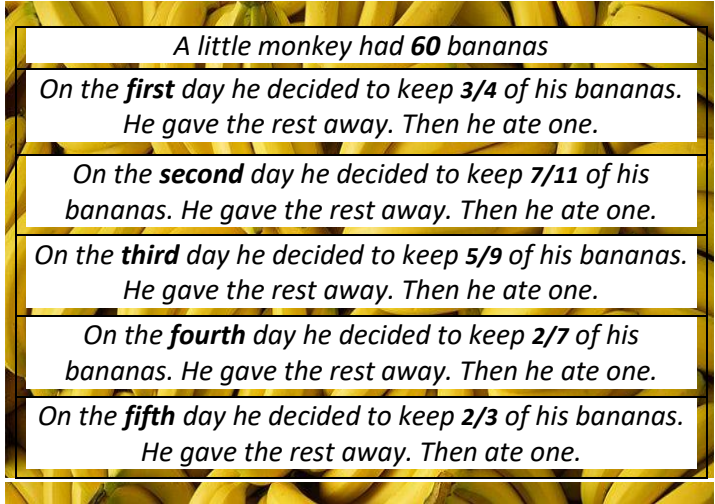


ANSWERS



Maths FOCUS: Finding fractions of numbers; multiplication and division

HELPFUL HINTS: work through the problem step by step recording your workings as you go

Level 1	Level 2	Level 3
<p>Poppy is trying to solve a fraction word problem and needs your help.</p>  <p>A little monkey had 16 bananas at the start of the day. For breakfast, he ate a half of his bananas. For lunch, he ate a quarter of the bananas which were left. For dinner, he ate a half of the bananas which were left.</p> <ol style="list-style-type: none"> How many bananas did he eat for breakfast? 8 How many bananas were left over after breakfast? 8 How many bananas did he eat for lunch? 2 How many bananas were left over after lunch? 6 How many bananas did he eat for dinner? 3 How many bananas were left over after dinner? 3 	<p>Poppy is trying to solve a fraction word problem and needs your help.</p>  <p>A little monkey had 40 bananas. On Monday, he ate 1/4 of his bananas. On Tuesdays, he ate 1/2 of the bananas which were left. On Wednesday, he ate 1/3 of the bananas which were left. On Thursday, he ate 1/5 of the bananas which were left. On Friday, he ate 3/4 of the bananas which were left.</p> <ol style="list-style-type: none"> How many bananas does the monkey eat each day? M - 10 T - 15 W - 5 T - 2 F - 6 How many bananas are left over each day? M - 30 T - 15 W - 10 T - 8 F - 2 	<p>Poppy is trying to solve a fraction word problem and needs your help.</p>  <p>A little monkey had 60 bananas On the first day he decided to keep 3/4 of his bananas. He gave the rest away. Then he ate one. On the second day he decided to keep 7/11 of his bananas. He gave the rest away. Then he ate one. On the third day he decided to keep 5/9 of his bananas. He gave the rest away. Then he ate one. On the fourth day he decided to keep 2/7 of his bananas. He gave the rest away. Then he ate one. On the fifth day he decided to keep 2/3 of his bananas. He gave the rest away. Then ate one.</p> <ol style="list-style-type: none"> How many bananas does the monkey keep after each day? 1st - 45 2nd - 28 3rd - 15 4th - 4 5th - 2 How many bananas does the monkey give away each day? 1st - 15 2nd - 16 3rd - 12 4th - 10 5th - 1 How many bananas does he have left at the end? 1 How many bananas does the monkey eat altogether? 5