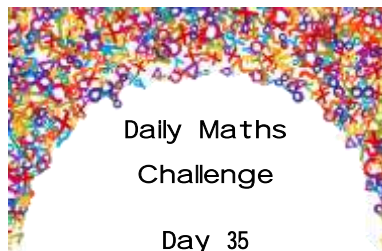





ANSWERS



Maths Focus: Mathematical and logical thinking; telling the time

Helpful Hints: Try to focus on where the clock hands are in relation to the numbers, rather than the position of the hands.

Level 1	Level 2	Level 3
<p data-bbox="107 517 728 624">Elliot has transported to Mirror Land and has noticed that everything is a mirror image of the normal World. He is trying to tell the time.</p>  <p data-bbox="159 1225 696 1294">1. What is the time on this mirror-image clock?</p> <p data-bbox="342 1342 589 1369">Nine o'clock / 9:00</p>	<p data-bbox="795 517 1415 624">Elliot has transported to Mirror Land and has noticed that everything is a mirror image of the normal World. He is trying to tell the time.</p>  <p data-bbox="846 1225 1384 1294">1. What is the time on this mirror-image clock?</p> <p data-bbox="1043 1342 1308 1369">Quarter to six / 5:45</p>	<p data-bbox="1482 517 2103 624">Elliot has transported to Mirror Land and has noticed that everything is a mirror image of the normal World. He is trying to tell the time.</p>  <p data-bbox="1534 1225 2072 1294">1. What is the time on this mirror-image clock?</p> <p data-bbox="1628 1342 2098 1369">Twenty-two minutes to three / 2:38</p>