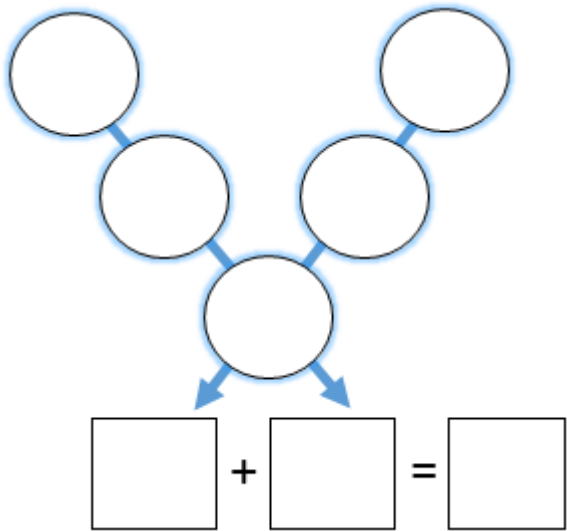
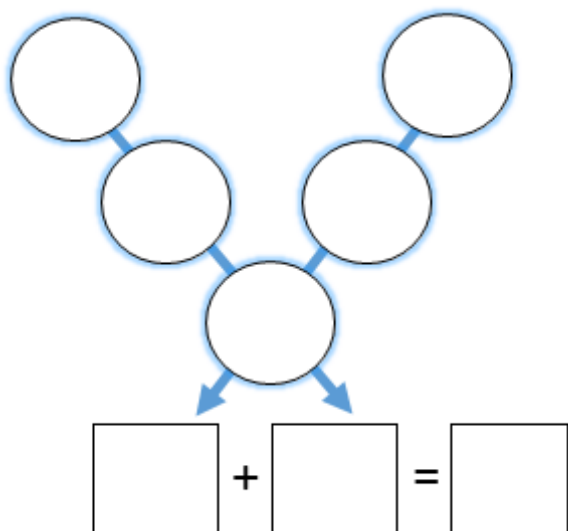
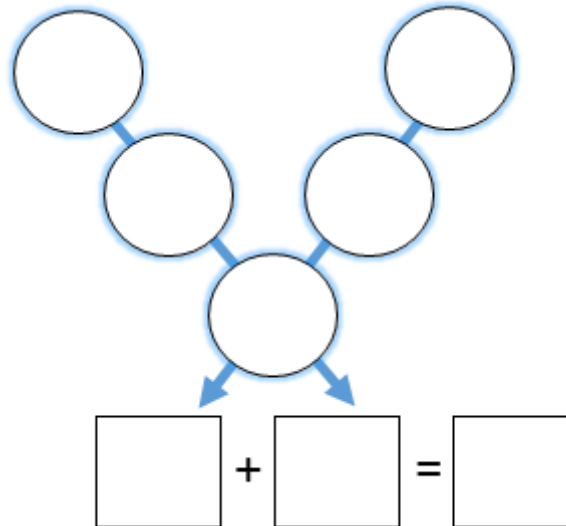


ANSWERS



Maths Focus: mental and written addition, logical and systematic thinking

Helpful Hints: Think about why the bottom number in the V shape is very important

Level 1	Level 2	Level 3
<p>Immy is using a 'Magic V' to add numbers up. She places the numbers 1-5 in any of the circles and then adds up the two rows, then those totals to get a final total.</p>  <p>1. Where could she place the numbers to get the highest total? Any order as long as the 5 is at the bottom</p>	<p>Immy is using a 'Magic V' to add numbers up. She places the numbers 6-10 in any of the circles and then adds up the two rows, then those totals to get a final total.</p>  <p>1. Where could she place the numbers to get the highest total? Any order as long as the 10 is at the bottom 2. Where could she place the numbers to get the lowest total? Any order as long as the 6 is at the bottom</p>	<p>Immy is using a 'Magic V' to add numbers up. She places the numbers 11-15 in any of the circles and then adds up the two rows, then those totals to get a final total.</p>  <p>1. Where could she place the numbers to get the highest total? Explain how you know. 15 in the bottom as that number is added twice 2. Where could she place the numbers to get the lowest total? Explain how you know. 11 in the bottom as that number is added twice 3. How could she made the total of 78? With 13 in the bottom</p>