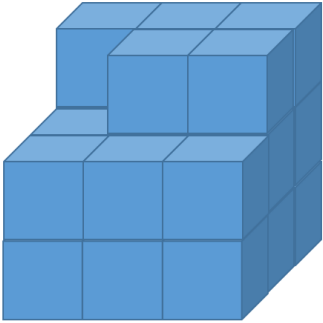
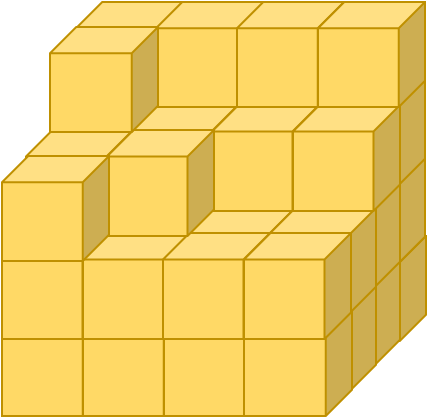





Maths Focus: properties of 3D shape: mathematical thinking

Helpful Hints: remember that the properties of a cube are that its height, width and depth are the same length

| Level 1   | Level 2  | Level 3   |
|---|--|---|
| <p data-bbox="107 539 627 608">Ana wants to build a big 3 x 3 cube. She uses little cubes to build it.</p>  <p data-bbox="159 1206 640 1278">1. How many more little cubes does she need?</p> | <p data-bbox="689 539 1272 608">Ana wants to build a big 4 x 4 cube. She uses little cubes to build it.</p>  <p data-bbox="741 1198 1279 1270">1. How many more little cubes does she need?</p> | <p data-bbox="1350 539 2123 608">Ana wants to build a big 5 x 5 cube. She uses little cubes to build it.</p>  <p data-bbox="1402 1190 2029 1222">1. How many more little cubes does she need?</p> |